

## LITERACY IIA

### SECTION A

1. What name is given to general cleanliness of a place where we live or stay? \_\_\_\_\_
2. What is personal hygiene? \_\_\_\_\_  
\_\_\_\_\_
3. Why do we iron clothes? \_\_\_\_\_
4. Name one example of food we eat at school.  
\_\_\_\_\_
5. Which immunisable disease causes sore throat in children?  
\_\_\_\_\_
6. **Draw a child with measles.**

Measles

7. Name one childhood immunisable disease.  
\_\_\_\_\_
8. Why do we boil water for drinking?  
\_\_\_\_\_

9. What is sanitation? \_\_\_\_\_  
\_\_\_\_\_
10. What is wind? \_\_\_\_\_
11. Name any one season. \_\_\_\_\_
12. How does a chameleon protect itself?  
\_\_\_\_\_
13. Give one example of body building food.  
\_\_\_\_\_
14. Give one use of water. \_\_\_\_\_
15. Name one living thing. \_\_\_\_\_
16. Why do we do physical exercises?  
\_\_\_\_\_
17. Write one thing we find in our environment.  
\_\_\_\_\_
18. Where do sick people go for treatment?  
\_\_\_\_\_
19. What name is given to special drug used to help the body  
fight disease causing germs? \_\_\_\_\_
20. Write one example of domestic birds.  
\_\_\_\_\_

## SECTION B

21. Name four examples of garden tools.

(i) \_\_\_\_\_ (ii) \_\_\_\_\_

(iii) \_\_\_\_\_ (iv) \_\_\_\_\_

22. Write the type of weather for these elements.

(i) Rain: \_\_\_\_\_

(ii) Sunshine : \_\_\_\_\_

(iii) Wind: \_\_\_\_\_

(iv) Cloud cover: \_\_\_\_\_

23(a) What are wild animals? \_\_\_\_\_

(b) Where do wild animals live? \_\_\_\_\_

(c) Name two examples of wild animals.

(i) \_\_\_\_\_ (ii) \_\_\_\_\_

24. Name four examples of vaccines used to immunize children.

(i) \_\_\_\_\_ (ii) \_\_\_\_\_

(iii) \_\_\_\_\_ (iv) \_\_\_\_\_

25. Name the animal for each meat.

(a) pork \_\_\_\_\_ (b) mutton \_\_\_\_\_

(c) beef \_\_\_\_\_ (d) chicken \_\_\_\_\_

26(a) How can we keep our toilets or latrines clean?

\_\_\_\_\_

.

(c) How can we keep our compound clean? Give two ways.

(i) \_\_\_\_\_

(ii) \_\_\_\_\_

(c) List one thing we use to practice sanitation

\_\_\_\_\_

27. Name the sense organs on the body which help with these senses

(i) Hearing \_\_\_\_\_ (ii) Smelling \_\_\_\_\_

(iii) Seeing or sight \_\_\_\_\_

(iv) Tasting: \_\_\_\_\_

28(a) Write two ways of keeping our bodies clean.

(i) \_\_\_\_\_

(ii) \_\_\_\_\_

(b) What is the use of flat iron or iron box?

\_\_\_\_\_

(c) Give one way of keeping our houses clean.

\_\_\_\_\_

29. Name the homes of these animals.

(a) dog \_\_\_\_\_ (b) cow \_\_\_\_\_

(c) bird \_\_\_\_\_ (d) pig \_\_\_\_\_

30(a) What name is given to things which do not have life?

\_\_\_\_\_

(b) Name three examples of things which do not have life.

(i) \_\_\_\_\_ (ii) \_\_\_\_\_

(iii) \_\_\_\_\_

31. Write down four examples of common diseases that we suffer from.

(i) \_\_\_\_\_ (ii) \_\_\_\_\_

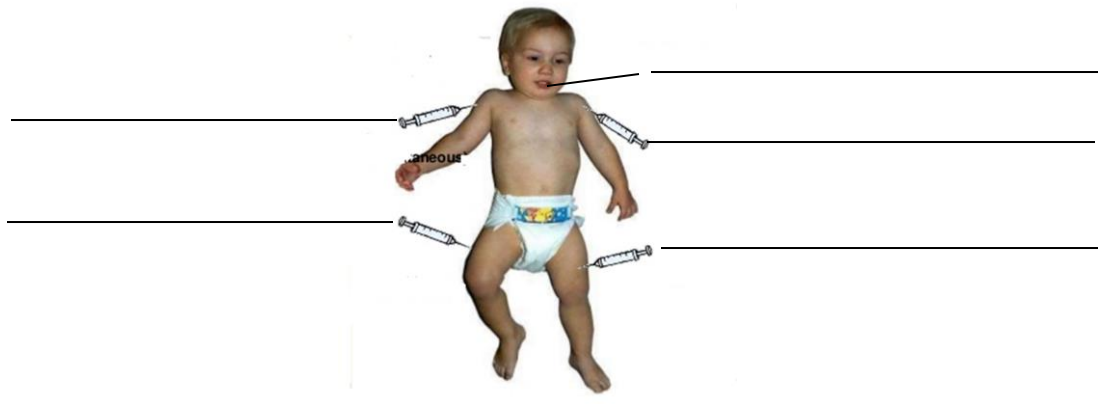
(iii) \_\_\_\_\_ (iv) \_\_\_\_\_

32. Name any four parts of the arm.

(i) \_\_\_\_\_ (ii) \_\_\_\_\_

(iii) \_\_\_\_\_ (iv) \_\_\_\_\_

33. Name the five sites for immunization.



34(a) Name three classes of food.

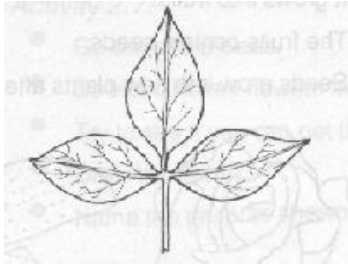
(i) \_\_\_\_\_ (ii) \_\_\_\_\_

(iii) \_\_\_\_\_

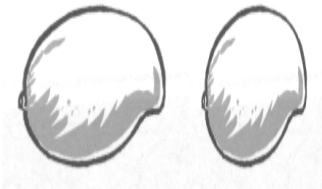
b) Which class of food helps you to grow well?

\_\_\_\_\_

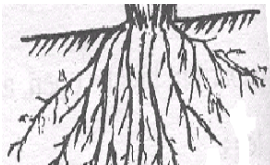
35. Match the picture to the word.



fruit



leaves



flower



roots

**End**